

meno: _____

1. Rozlož čísla na tisícky, stovky, desiatky a jednotky.

Vzor: $1\ 578 = 1\ 000 + 500 + 70 + 8$

$6\ 541 = \underline{\hspace{2cm}}$

$2\ 509 = \underline{\hspace{2cm}}$

$5\ 910 = \underline{\hspace{2cm}}$

$8\ 008 = \underline{\hspace{2cm}}$

$3\ 079 = \underline{\hspace{2cm}}$

$6\ 789 = \underline{\hspace{2cm}}$

$423 = \underline{\hspace{2cm}}$

$804 = \underline{\hspace{2cm}}$

2. Zlož na čísla.

$6\ 000 + 400 + 80 + 9 = \underline{\hspace{2cm}}$

$6 + 500 + 30 + 1\ 000 = \underline{\hspace{2cm}}$

$600 + 8\ 000 + 20 + 7 = \underline{\hspace{2cm}}$


$2\ 000 + 10 + 300 = \underline{\hspace{2cm}}$

$1\ \text{tisícka} + 5\ \text{stoviek} + 7\ \text{desiatok} + 8\ \text{jednotiek} = \underline{\hspace{2cm}}$

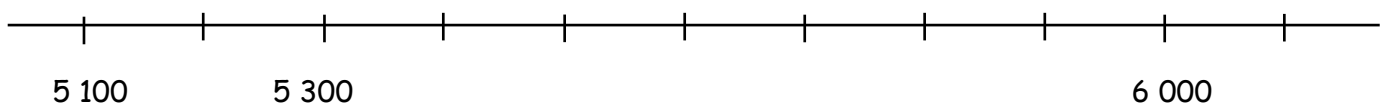
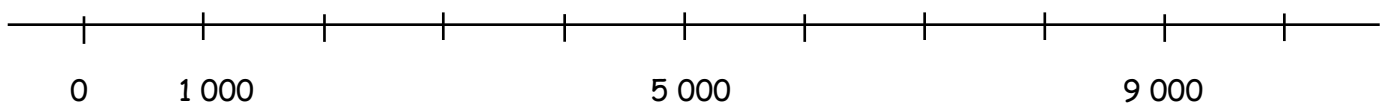
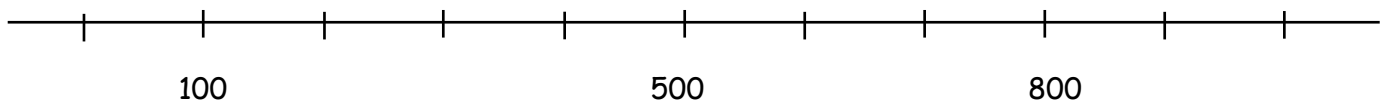
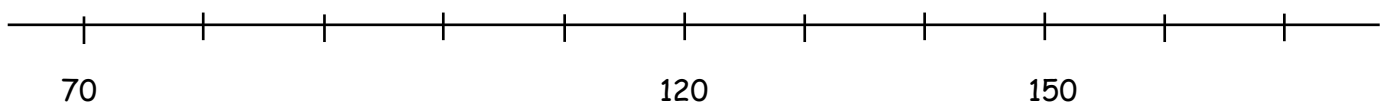
$4\ \text{tisícky} + 6\ \text{stoviek} + 9\ \text{desiatok} + 5\ \text{jednotiek} = \underline{\hspace{2cm}}$

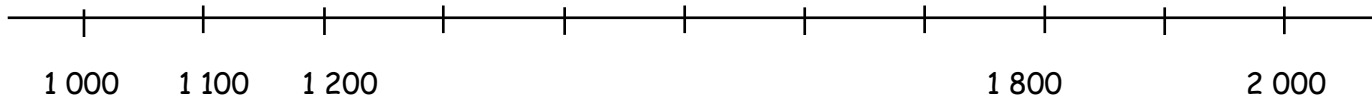
$2\ \text{tisícky} + 3\ \text{stovky} + 0\ \text{desiatok} + 4\ \text{jednotky} = \underline{\hspace{2cm}}$

$7\ \text{tisícok} + 1\ \text{desiatka} + 1\ \text{jednotka} = \underline{\hspace{2cm}}$



3. Doplň číselné osi.





4. Vyplň sčítacie tabuľky.

| | | | | |
|-------|-------|-------|-------|-------|
| + | 3 000 | 5 000 | 2 000 | 7 000 |
| 1 000 | | | | |
| 2 000 | | | | |
| 3 000 | | | | |

| | | | | |
|-------|---|----|-----|-----|
| + | 2 | 30 | 100 | 132 |
| 1 000 | | | | |
| 2 000 | | | | |
| 3 000 | | | | |

5. Vyplň odčítacie tabuľky.

| | | | | |
|-------|-------|-------|-------|--------|
| - | 5 000 | 7 000 | 8 000 | 10 000 |
| 1 000 | | | | |
| 3 000 | | | | |
| 5 000 | | | | |

| | | | | |
|-----|-----|-----|-------|-------|
| - | 100 | 300 | 1 000 | 2 000 |
| 1 | | | | |
| 10 | | | | |
| 100 | | | | |

6. Premeň na tú istú dĺžku v metroch.

4 km = _____ m

7 km = _____ m

2 km = _____ m

5 km = _____ m



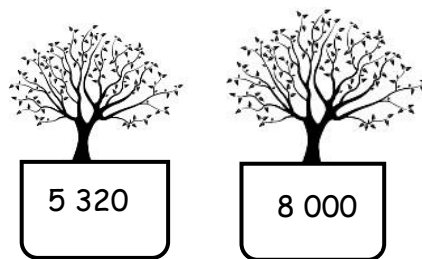
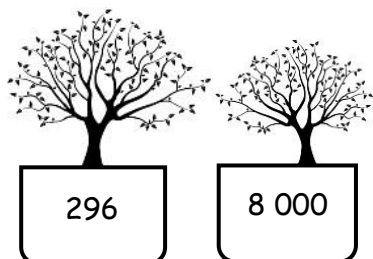
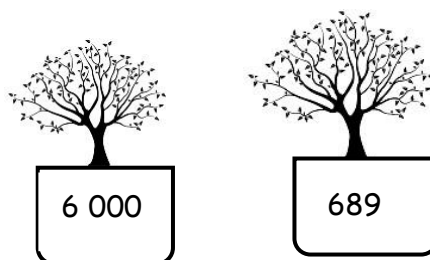
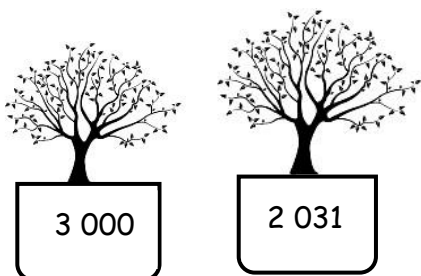
9 000 mm = _____ m

7 000 mm = _____ m

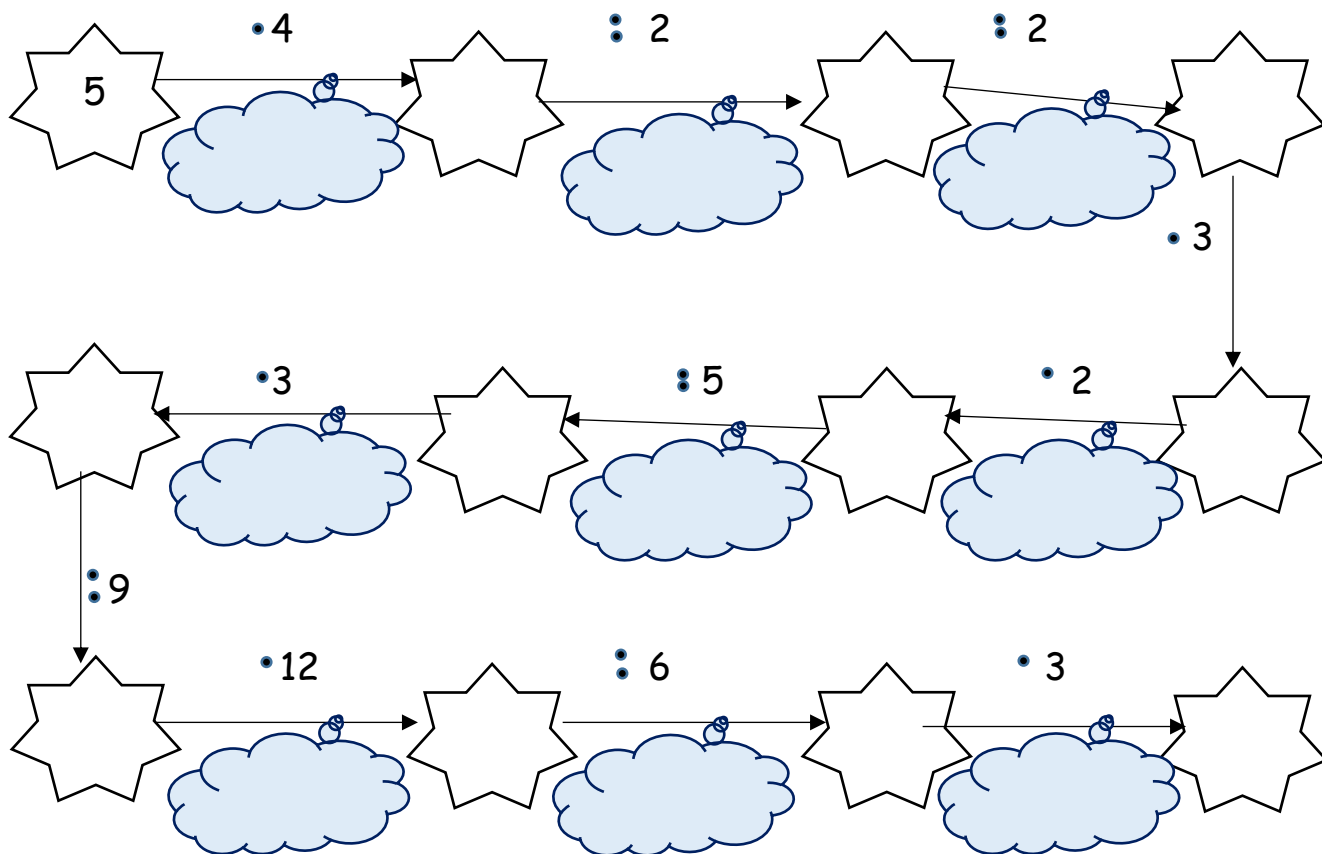
3 000 mm = _____ m

1 000 mm = _____ m

7. Viac listov má stromček v žltom kvetináči. Menej listov v modrom. Vyfarbi ich.



8. Zopakuj si násobenie a delenie. Môžeš si pomôcť postupným sčítaním v obláčikoch.



9. Rieš 3 slovné úlohy.

☺ Beáta prešla pešo 4 kilometre. Patrik prešiel 3-krát viac. Koľko kilometrov prešiel Patrik ?

Zápis: _____

Výpočet: _____

Odpoveď: _____



☺ Samo videl počas turistiky 18 značiek, Erik ich videl 3-krát menej . Koľko značiek videl Erik ?

Zápis: _____

Výpočet: _____

Odpoveď: _____





Karol urobil 2 000 krokov, Juraj o 3 000 viac. Koľko krokov urobil Juraj ? Koľko krokov urobili spolu?

Zápis: _____



Výpočet: _____

Odpoveď: _____

Odpoveď: _____

10. Nájdí vynechané čísla.

$6\ 327 - \boxed{} = 6\ 000$

$4\ 000 + \boxed{} = 4\ 251$

$35 + \boxed{} = 1035$

$\boxed{} + 52 = 2\ 052$

$\boxed{} - 541 = 3\ 000$

$\boxed{} - 6000 = 529$


$9\ 000 - \boxed{} = 5\ 000$

$5\ 000 + \boxed{} = 10\ 000$

$\boxed{} - 3\ 000 = 2\ 000$

Bonusová úloha

Pomôž Garfieldovi nájsť cestu do postele.



Ako sa ti dnes darilo?

