



Write the number.

1 tens 3 ones .....

2 tens 0 ones .....

0 tens 7 ones .....

1 tens 10 ones .....

1 tens 5 ones .....

1 tens 0 ones .....



Add.

$7 + 8 = \square$  , .....



Practise adding.

$8 + 3 =$	$9 + 5 =$	$10 + = 13$	$4 + 6 =$
$9 + 6 =$	$4 + 9 =$	$12 + = 14$	$5 + 6 =$
$8 + 8 =$	$7 + 7 =$	$9 + = 11$	$3 + 9 =$
$2 + 9 =$	$8 + 2 =$	$8 + = 12$	$5 + 8 =$
$6 + 7 =$	$7 + 7 =$	$7 + = 11$	$9 + 2 =$

? How much is the BAT ?



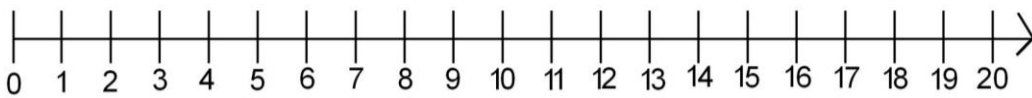
Match. Who is first, second,....?



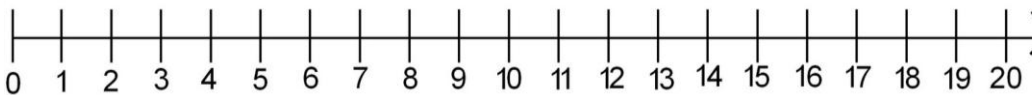
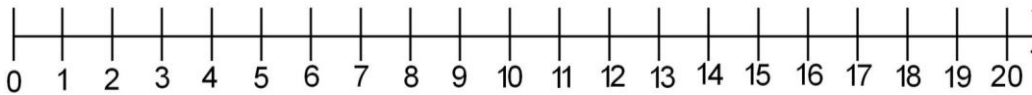
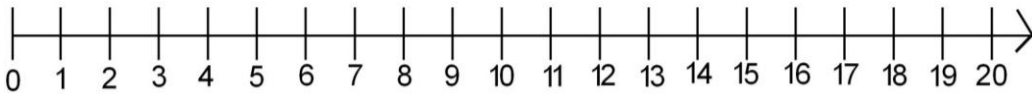
- 2nd
- 3rd
- 1st
- 4th

clown    princess    witch    devil

**?** How can you get to 20 in three jumps?



$+$   $+$   $=20$



**?** \_\_\_\_\_

There are 6 **ghosts**



in the red box and




6 ghosts in the yellow box .

How many ghosts in all?

There are ..... ghosts.

**?**

There are 7 black and 8 green **monsters**.



How many monsters in all?

There are ..... monsters.

**?**

There are 5 **witches** on the house and 9 in the house.



How many withes in all?


There are ..... witches.

The 4 witches flew away on a broom. How many witches are there now?

There are..... witches.




Šikulkove úlohy:

 Zisti v kalendári, alebo na internete, kedy bude




Halloween .....

Sviatok všetkých svätých .....



 What 's this? It's a ....



 Draw .  Cut.  Stick.

Nakresli a vystrihni na výkres vlastné strašidlo, pracuj na spoločnom projekte:

Zdroje:

[www.google.com](http://www.google.com)