






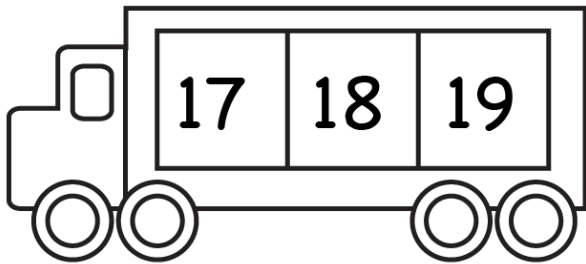


Counting, addition, subtraction to 30

Before and After Numbers

Write the numbers that come before and after.





There are 5 fingers
in a hand.

How many fingers are there in 2 hands?



How many fingers are there in 3 hands?



How many fingers are there in 4 hands?



How many fingers are there in 5 hands?



How many fingers are there in 6 hands?



Complete the numbers

Three caterpillars are shown, each with a head and seven segments. The numbers in the segments are as follows:

- Caterpillar 1: 1, 3, 7, 10
- Caterpillar 2: 11, 13, 17, 20
- Caterpillar 3: 21, 23, 27, 30

Write four different facts.

Four houses are shown, each with a roof number and four math problems inside:

- House 1: Roof 9, sides 2 and 7. Problems: $\square + \square = \square$, $\square + \square = \square$, $\square - \square = \square$, $\square - \square = \square$
- House 2: Roof 7, sides 3 and 4. Problems: $\square + \square = \square$, $\square + \square = \square$, $\square - \square = \square$, $\square - \square = \square$
- House 3: Roof 8, sides 6 and 2. Problems: $\square + \square = \square$, $\square + \square = \square$, $\square - \square = \square$, $\square - \square = \square$
- House 4: Roof 6, sides 5 and 1. Problems: $\square + \square = \square$, $\square + \square = \square$, $\square - \square = \square$, $\square - \square = \square$

A train engine and four cars are shown, each with a counting instruction and a sequence of numbers:

- Engine: Count by 2s
- Car 1: 2, 4
- Car 2: 3, 6
- Car 3: 4, 8
- Car 4: 5, 10

Word problems:

I have 5 red fish, 7 blue fish and 2 yellow fish. How many fish do I have in all?




Red.....

Blue.....

Yellow.....

Together.....? I have got ____ fish.

Mary has 2 dogs, 3 cats and 5 fish. How many pets does she have in all?



Dogs.....

Cats.....

Fish.....

Pets.....? Mary has ____ pets.

In an aquarium, there are seven pink fish, three purple fish and one orange fish. How many fish are in the aquarium?



Pink.....

Purple.....

Orange.....

Fish.....? In aquarium there are ____ fish.

Resources:

www.workshetfun.com

Fish: http://www.crayonaction.com/wp-content/uploads/2012/01/Number_5_coloring_page.jpg

Dogs: <http://www.laptopezine.com/latest-two-little-dogs-coloring-pages-dog/>

Cats: <http://4.bp.blogspot.com/-QcWOx-vSxQI/UfO47dnbXI/AAAAAAAAAVs/63NLHvI7D0Q/s1600/3+cute+cats+didi+coloring.jpg>

Aquarium: <http://kidjamboree.files.wordpress.com/2014/08/make-color-by-number-coloring-9.jpg>