

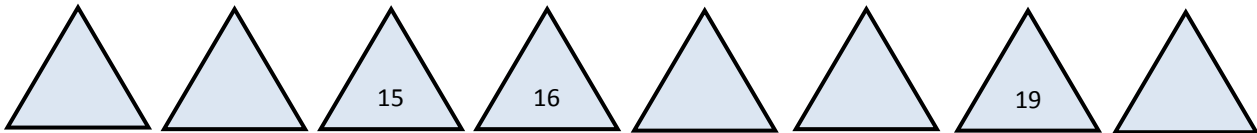
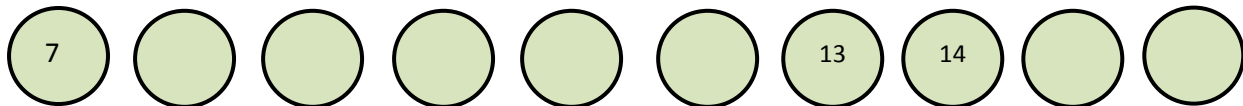
MATH

Počítame s druhákmi- daltonské zadanie s metódou CLIL


Name: _____

Class: _____

1. Complete the numbers in the sequence.



2. Which torch is the longest?



3.How many apples are there?



There are _____ apples.

4.Draw fruit in the basket.



8 apples



11 oranges



7 bananas

5.Find the difference.

$10 - 8 =$

$7 - 3 =$

$16 - 4 =$

$20 - 3 =$

$18 - 5 =$

$15 - 14 =$

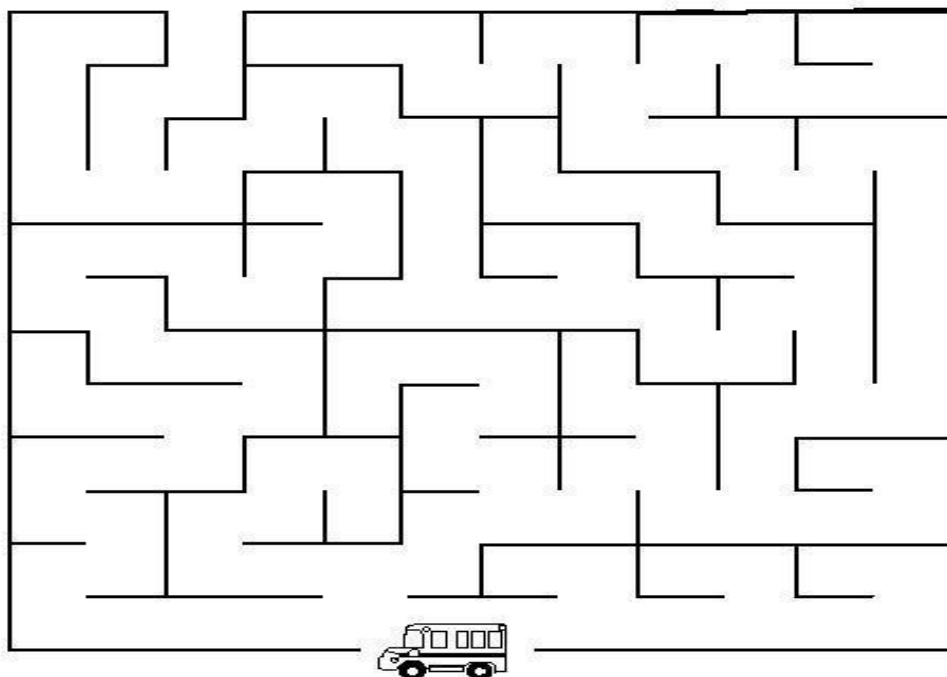
6. Which picture shows **14 puzzle** pieces?



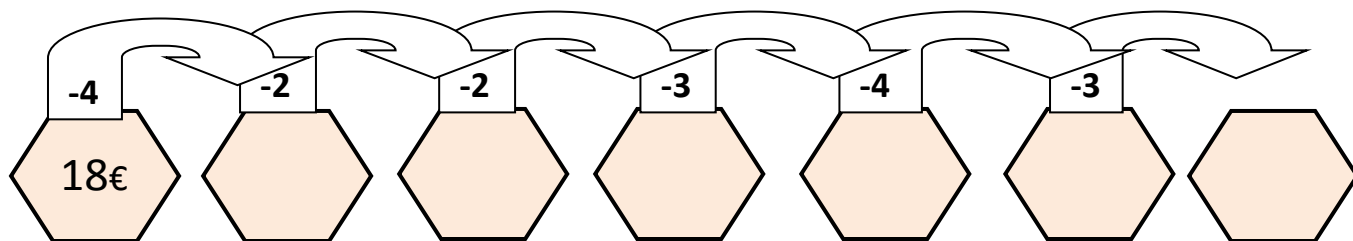
7. Colour the way.



Help children get to the bus.



8. How do you spend the money?



9. How much money is there?



There are _____ cents.



There are _____ cents.



There are _____ cents.



There are _____ cents.



There are _____ cents.



There are _____ cents.

10. A pack of sweets costs 15 cent. Do you have enough money to buy it?



15 c

Yes

No



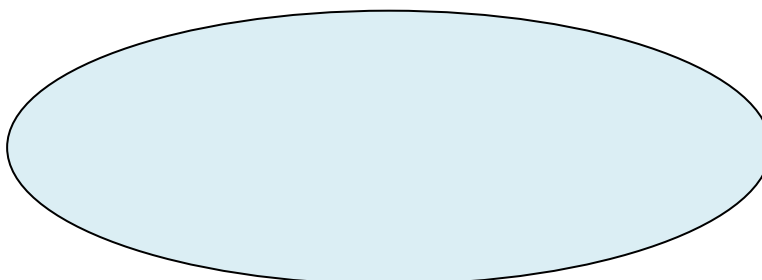
11. Stick the right number of coins into the circles.




LION



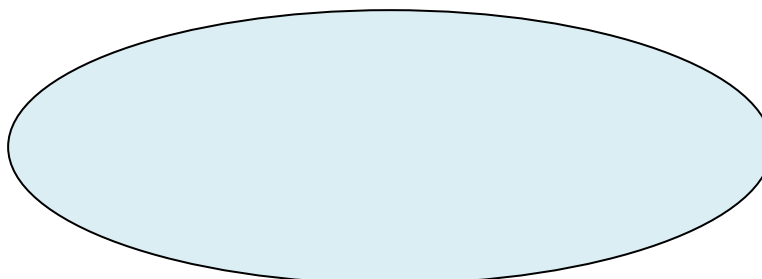
20c




ZEBRA



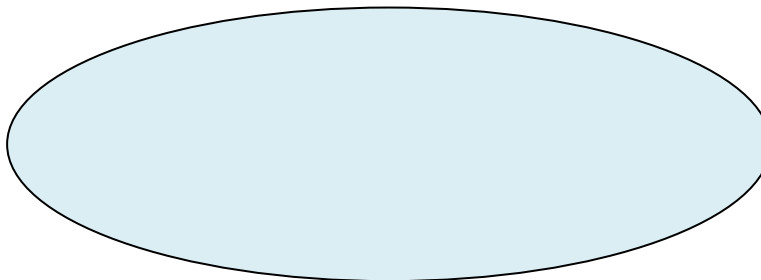
18c



HIPPO



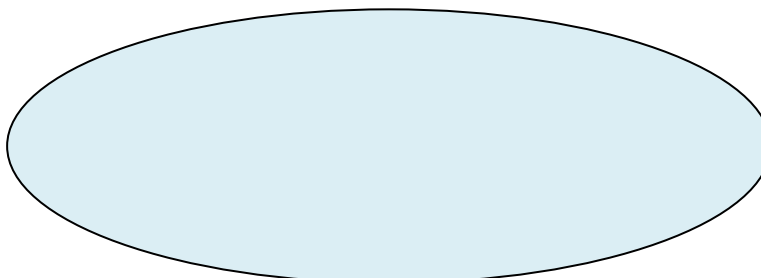
14c




fish



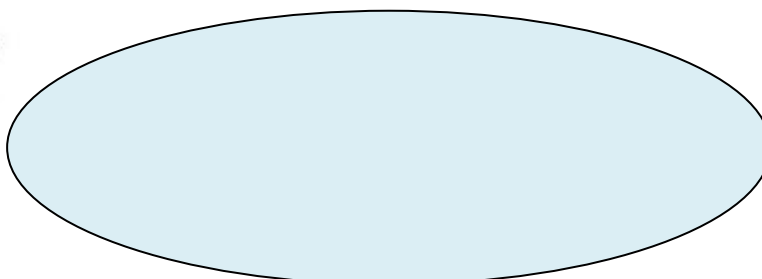
9c



shark



16c



12. Which is more? Use $<$ $>$ $=$.



13. Match the hearth with the correct sum.



$11+5$

$16+4$

$4+5$

$3+7$

$12+6$

$4+13$

$6+3$

Recovery



Zdroje :

obrázky dňa 23. 8 .2013 nájdené na adrese

baterky, jablká, puzzle, mince

<http://eu.ixl.com/math/grade-1>

košík

https://www.cyclechic.co.uk/sites/default/files/imagecache/mouseover_zoom/images/products/brooks-hoxton-bicycle-basket.jpeg

nožnice

<http://tinalee.info/?p=3092>

obrázky zvierat

<http://vectorpicfree.com/vector-clip-art/funny-cartoon-animals-for-kids-vector/>

smajlíci

<http://www.tiskatka.cz/3-3-home/sada-smajliku.jpg>

cukríky:

<http://www.mojasvadba.sk/shopy/svadbne-kosiky-vrecka/so0z/vrecusko-na-cukriky/>

bludisko

<http://www.nasarodina.sk/article.php?sid=1432>

